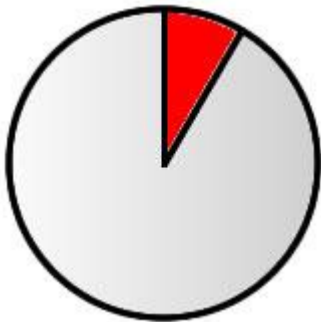


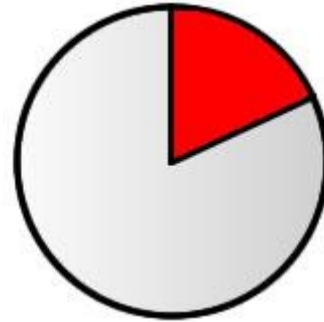
The Angle Making Machine

Guess the size of the angles shown in red below and write your guess. Then measure the angles and write down your measurement.



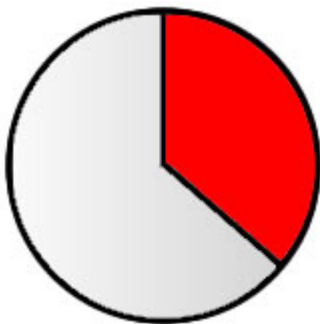
My guess is _____°

My measurement is _____°



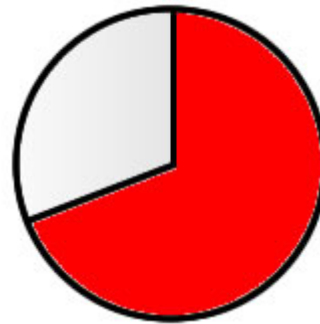
My guess is _____°

My measurement is _____°



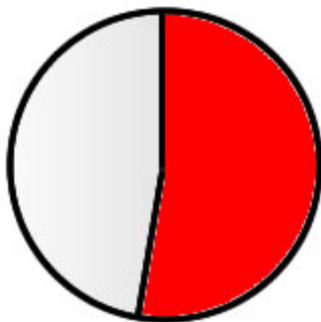
My guess is _____°

My measurement is _____°



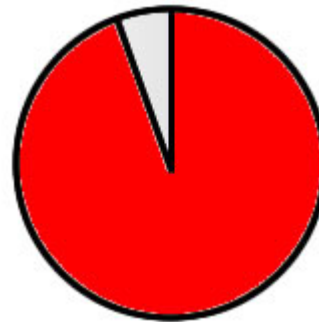
My guess is _____°

My measurement is _____°



My guess is _____°

My measurement is _____°



My guess is _____°

My measurement is _____°